

Year 1 week 11 Maths

Monday

Work out these maths challenge cards in your exercise book. You can draw pictures to help you.

Maths Challenge Cards

There are 16 fish swimming in the sea. The fish are yellow, red and green. 5 fish are red, 6 fish are green. How many are yellow?



Maths Challenge Cards

Octopus have 8 tentacles. How many tentacles are there altogether below?



Maths Challenge Cards


Lauren, Claire and Shantal are scuba diving. They each have different coloured hair. The different colours are brown, blonde and ginger.



Claire is on the right and has brown hair. Shantal is on the left and doesn't have ginger hair. Where is Lauren and what colour is her hair?

Maths Challenge Cards

The shark has 6 more teeth than the swordfish. The swordfish has 12 teeth. How many teeth does the shark have?



Maths Challenge Cards

Add together the numbers

2, 3, 4, 6, 7, 8, 10



What is the total?
Can you find a quick way to do this?

Maths Challenge Cards

The first anchor weighs 4kg, the second anchor weighs 7kg and the third anchor weighs 2kg. What's the total weight of all the anchors?



Practice Sheet Mild

Fish doubles




2	+	2	=	
---	---	---	---	--



	+		=	
--	---	--	---	--



	+		=	
--	---	--	---	--



	+		=	
--	---	--	---	--



	+		=	
--	---	--	---	--



	+		=	
--	---	--	---	--

Challenge

Draw two more different fish doubles.
Write a number sentence for each.



	+		=	
--	---	--	---	--



	+		=	
--	---	--	---	--

Wednesday

Choose if you would like to complete the mild, spicy or hot task. Once you have finished filling out the missing numbers on your grid, use it to answer these questions:

$15+10=$

$31+5=$

$54+10=$

$57-4=$

$86-10=$

$83+8=$


$62-10=$

$21-6=$

Can you fill in the missing numbers?




1		3	4	5	6	7	8	9	10
11	12	13	14		16	17	18	19	20
21	22	23	24	25	26	27	28		30
31	32	33	34	35		37	38	39	40
41	42		44	45	46	47	48	49	50
51	52	53	54		56	57	58	59	60
61	62	63	64	65	66		68	69	70
71		73	74	73	76	77	78	79	80
81	82	83	84		86	87	88	89	90
91	92	93	94	95	96	97		99	




Can you fill in the missing numbers?




1		3	4	5	6		8	9	10
11	12		14	15	16	17	18	19	20
21	22	23		25	26		28	29	30
31	32	33	34	35		37	38	39	40
41	42	43		45	46	47	48	49	50
51		53	54			57	58	59	60
61	62		64	65	66	67	68		70
71	72	73	74		76		78	79	80
81	82		84	85	86	87	88	89	90
91	92	93	94	95		97	98		100



Can you fill in the missing numbers?



1		3			6	7	8	9	10
	12	13	14		16			19	20
21	22		24	25	26	27	28		30
	32	33	34	35			38	39	40
41			44	45	46	47		49	
51	52		54		56	57	58		60
61	62	63		65				69	
71		73	74	75		77	78		80
81	82		84		86	87	88	89	
	92	93	94	95		97		99	



Practice Sheet Hot

Find the money totals

1.   

2.   

3.   

4.   

5.   

6.    

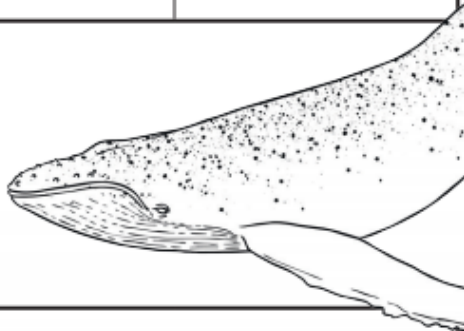

7.    

8.    

Friday

Crack the Codes under the Sea

a	b	c	d	e	f	g	h	i	j	k	l	m
1	2	3	4	5	6	7	8	9	10	11	12	13
n	o	p	q	r	s	t	u	v	w	x	y	z
14	15	16	17	18	19	20	21	22	23	24	25	26

20 - 5 = _____	20 - 17 = _____	10 + 10 = _____	10 + 5 = _____	8 + 8 = _____	30 - 9 = _____	25 - 6 = _____
10 + 9 = _____	4 + 4 = _____	30 - 29 = _____	11 + 7 = _____	25 - 14 = _____		
30 - 7 = _____	100 - 92 = _____	45 - 44 = _____	7 + 5 = _____	65 - 60 = _____		
2 + 2 = _____	35 - 20 = _____	23 - 11 = _____	29 - 13 = _____	3 + 5 = _____	12 - 3 = _____	9 + 5 = _____
89 - 70 = _____	50 - 42 = _____	8 + 10 = _____	39 - 30 = _____	6 + 7 = _____	11 + 5 = _____	
6 + 13 = _____	27 - 10 = _____	14 + 7 = _____	2 + 7 = _____	28 - 24 = _____		