

# Year 1 week 13 Maths

Monday

Pirate Themed Number and Place Value Challenge Cards

Anne Bonny has sorted her gold coins into piles of 10.



How many coins does she have? She finds 4 more coins. How many does she have now?

Pirate Themed Number and Place Value Challenge Cards

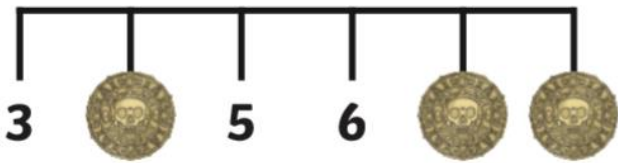
How many earrings can you see?



How did you find the answer?  
Was there a quicker way to find the answer?

Pirate Themed Number and Place Value Challenge Cards

Which numbers are hiding behind the coins?



Which coin did you fill in first? Explain why.

Pirate Themed Number and Place Value Challenge Cards

Scurvy Sam's parrot can say 12 words.  
Dubloon Dora's parrot can say one word more.

How many words can  
Dubloon Dora's parrot  
say? Write your answer  
in numerals and in words!



Pirate Themed Number and Place Value Challenge Cards

Pirate Paul has collected some bags of coins.

Each bag contains 5 coins. How many coins does  
he have altogether?



How did you find the answer?  
Was there a quicker way to find the answer?

Can you create your own pirate themed  
word problem for someone else to solve?

It can be addition, subtraction,  
multiplication or division.

When someone else has done your problem  
you can mark it. Show them how you got the  
correct answer.

# Roll, add and colour!

## INSTRUCTIONS;

1. Roll the dice twice
2. Add the numbers together
3. Colour the answer!

### Two player:

Each player choses a colour. The winner is the one with the most pirate images in their colour at



### Section 1

There are 3 pairs of pirate boots on the ship.  
How many boots is that altogether?



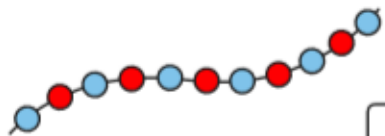
### Section 2

Pete had 3 crackers.  
Polly had 5. How many more crackers did Polly have?



### Section 3

Count the beads and write the number.




### Section 4

I lose 5p from the money pictured below.  
How much money have I got left?



### Section 5

Cut the wheel into quarters.



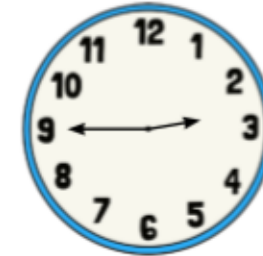
### Section 6

What numbers are missing?

10	8	6			0
----	---	---	--	--	---

### Section 7

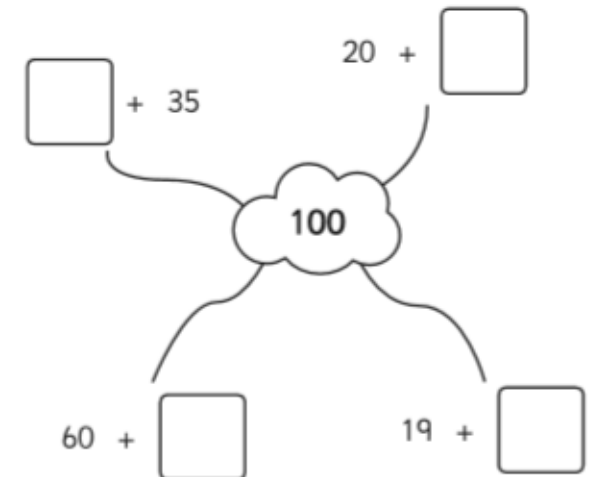
What time is it?



- 3 o'clock
- quarter past 7
- quarter to 3

### Section 8

Complete the number pairs:





How many are in each box?



How many do I have in total?

Halve the coins.



The whole is . Half of  is .

Can you create your own halving and doubling word problems in your exercise book?

### Section 1

There are 24 coins in the chest.

Poppy takes 5.

Bill takes 6.

How many coins are left in the chest?



### Section 2

Match the numbers with their names:

26            eighteen

15            thirty-one

31            twenty-six

18            fifteen

### Section 5

Draw the coins you need to make £1.25.

### Section 6

Choose the correct symbol to complete the number sentence.

- x +

$$12 \quad \square \quad 15 = 27$$

$$2 \quad \square \quad 4 = 8$$

### Section 3

Which would weigh more? Circle the heaviest.



or



or



or



### Section 4

30 → 10 less →

55 → 10 less →

83 → 10 less →

32 → 10 less →

### Section 7

Draw a picture to show this:  
 $10 - 7 = 3$

### Section 8

The ship docks in 2 days' time. Today is Saturday. What day does the ship dock?