




Monday

Mickey Mouse Math Inventory

	Agree 	Not sure 	Disagree 
6 lots of 2 is 12.			
If yesterday was Sunday so today is Tuesday.			
A cube is a 2d shape.			
1 more than 21 is 13.			
Sharing 20 biscuits between 2 children so each will have 10.			
$64 - 10 = 54$			
I will say 25 when I count in 10s.			

Memorable Moments

Name _____

The short hand is the **hour** hand. The long hand is the **minute** hand.



Color the hour hand red. Color the minute hand green. When the hour hand points to the 4 and the minute hand points to the 12, it is **4 o'clock**. We can also write it as **four o'clock** or **4:00**.

The clock next to each picture shows when each action begins. Circle the words that tell the time.

1.



A. 8 o'clock B. 1 o'clock

2.



A. 5 o'clock B. 9 o'clock

3.



A. 2 o'clock B. 3 o'clock

4.











A. 6 o'clock B. 12 o'clock

Wednesday

Use the tally chart (||||) to count the Disney character.


i SPY: Disney



Thursday

**Use 2d shapes to create a picture for your favourite Disney
Character**

A large empty rectangular box with a thin blue border, intended for the student to draw their favorite Disney character using 2D shapes.

